

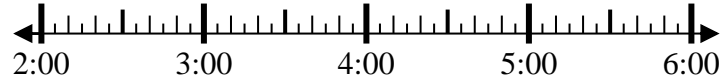


Solve each problem.

Answers

1) Start: 2:00

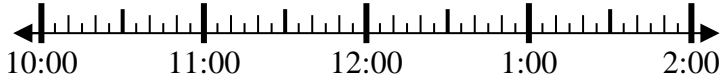
Elapsed: 2 hrs & 25 mins
End: _____



1. _____

2) Start: 10:35

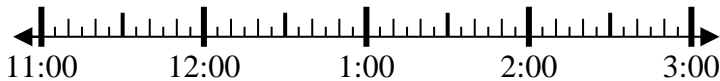
Elapsed: 1 hr & 30 mins
End: _____



2. _____

3) Start: 11:25

Elapsed: 2 hrs & 10 mins
End: _____



3. _____

4) Start: 1:50

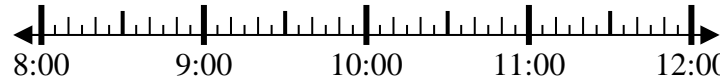
Elapsed: 1 hr & 25 mins
End: _____



4. _____

5) Start: 8:05

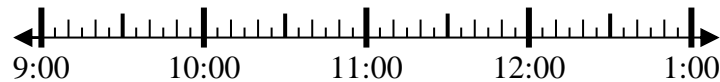
Elapsed: 1 hr & 35 mins
End: _____



5. _____

6) Start: 9:25

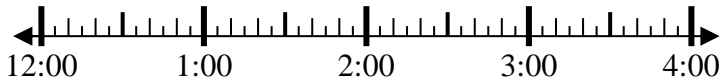
Elapsed: 2 hrs & 10 mins
End: _____



6. _____

7) Start: 12:30

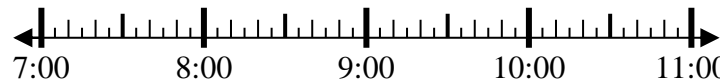
Elapsed: 1 hr & 40 mins
End: _____



7. _____

8) Start: 7:45

Elapsed: 1 hr & 40 mins
End: _____



8. _____

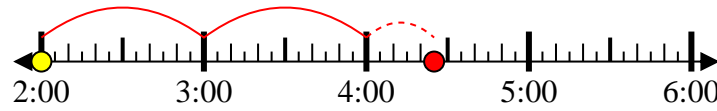


Solve each problem.

1) Start: 2:00

Elapsed: 2 hrs & 25 mins

End: 4:25



2) Start: 10:35

Elapsed: 1 hr & 30 mins

End: 12:05



3) Start: 11:25

Elapsed: 2 hrs & 10 mins

End: 1:35



4) Start: 1:50

Elapsed: 1 hr & 25 mins

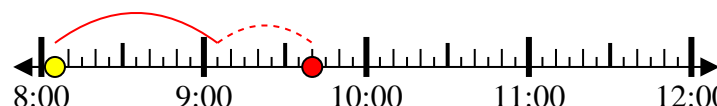
End: 3:15



5) Start: 8:05

Elapsed: 1 hr & 35 mins

End: 9:40



6) Start: 9:25

Elapsed: 2 hrs & 10 mins

End: 11:35



7) Start: 12:30

Elapsed: 1 hr & 40 mins

End: 2:10



8) Start: 7:45

Elapsed: 1 hr & 40 mins

End: 9:25



Answers

1. 4:25

2. 12:05

3. 1:35

4. 3:15

5. 9:40

6. 11:35

7. 2:10

8. 9:25